

The 10 times-table

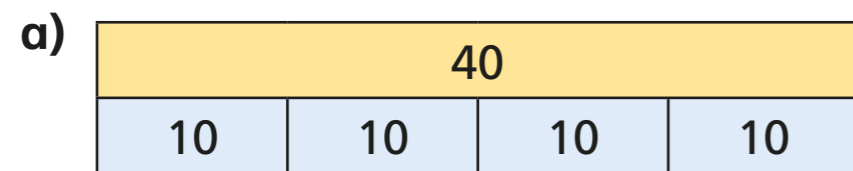
1 How many cookies are there?



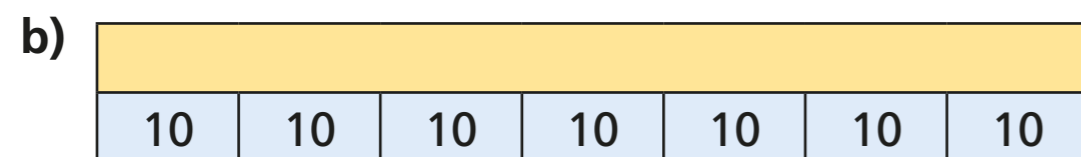
$$\square \times 10 = \square$$

There are cookies.


2 Complete the multiplication fact to match the bar model.



$$\square \times \square = \square$$



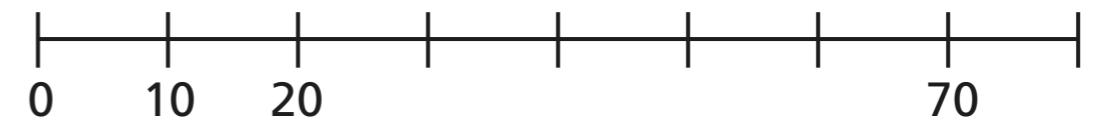
$$\square \times \square = \square$$



$$\square \times \square = \square$$

3 Draw a bar model to represent 5×10

4 a) Complete the number line.



b) Which times-table does the number line show?

Tick your answer.

10 times-table 5 times-table 1 times-table

How do you know?



5 Complete the number sentences.

a) $2 \times 10 = \square$

f) $\square = 10 \times 10$

b) $\square = 7 \times 10$

g) $10 \times \square = 10$

c) $10 \times 4 = \square$

h) $10 \times 0 = \square$

d) $10 \times \square = 110$

i) $30 = 10 \times \square$

e) $80 = \square \times 10$

j) $\square \times 10 = 90$

6 Eva is 7 years old.


Her gran is 10 times older.

How old is Eva's gran?

Eva's gran is \square years old.

7 Four children each have some money.

Teddy has this money.



Dora


I have twice as much money as Teddy.

I have five times as much money as Teddy.



Jack

I have ten times as much money as Dora.



Rosie

How much money do they each have?

Teddy has \square p

Dora has \square p

Jack has \square p

Rosie has \square p

