

Introduce capacity and volume

I a) Match the picture to the label.


empty

almost full


almost empty

full

b) Show 'almost full' and 'almost empty' another way.



almost full



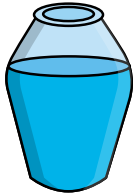
almost empty



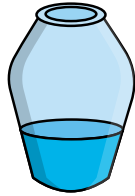
2 Choose a word to complete the sentence.

more

less



A



B

A has more than B.



A

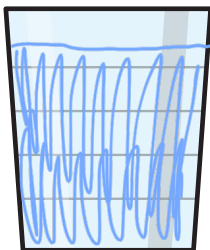


B


A has less than B.

3 Show the volume in each glass.

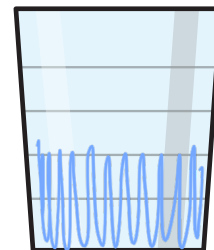
- A is nearly full.
- B is nearly empty.
- A has more than C.
- C has more than B.



A



B



C

Compare answers with a partner.

