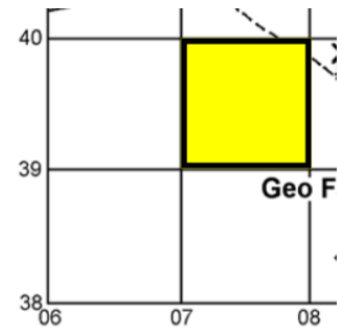


**LO: To use 4 figure grid references.**

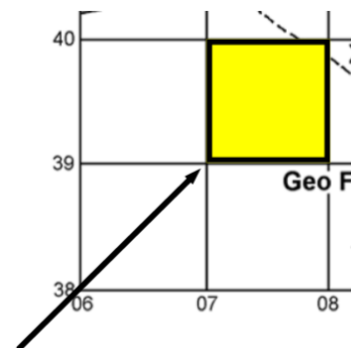
**Recap:**

4 figure grid references are used to identify which square on a map something is in. Remember, the grid reference has the horizontal (across) number first, followed by the vertical (up and down) number. The reference for each square is the point at the bottom right of it.

I'm going to work through how to find the grid reference of the yellow square with you

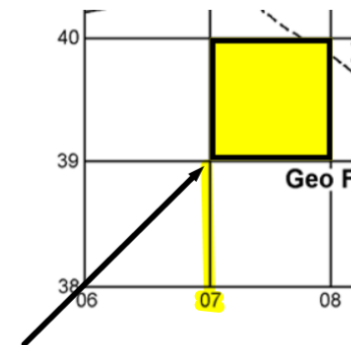


The grid reference for this square is the reference of the bottom left corner that the arrow is pointing to.



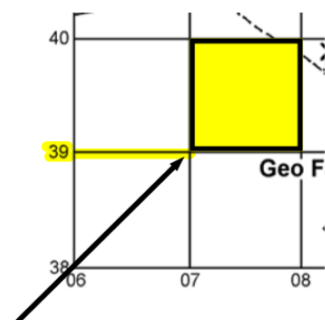
First, write the number of the line from across the bottom of the map.

07,



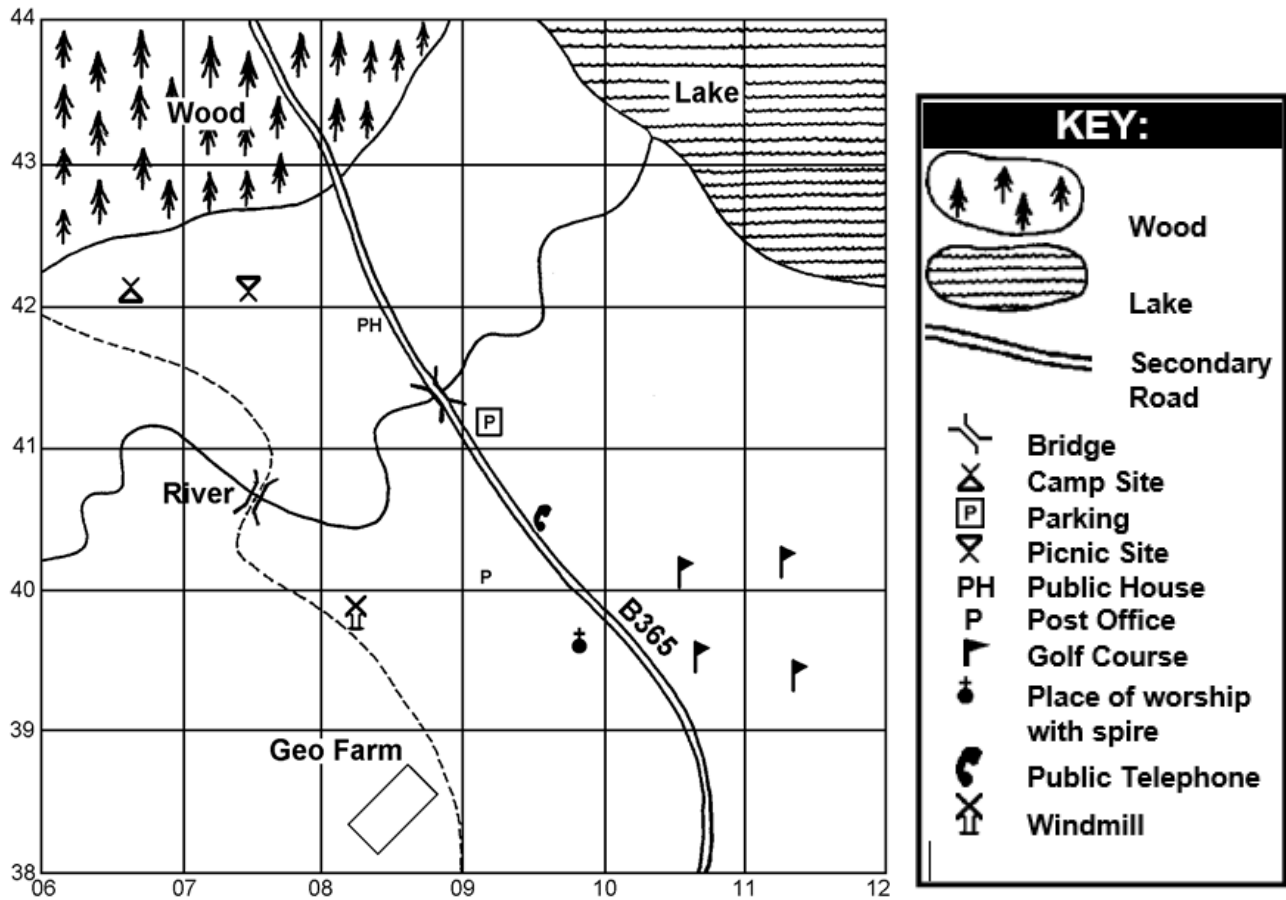
Next, write the number of the line from up the side of the map to complete the reference.

07,39



**Your task:**

Find the different items on the map below and note the 4 figure grid reference in your books. Use the key at the bottom if you're not sure what you are looking for.



Public House: \_\_\_\_\_

Parking: \_\_\_\_\_

Camp site: \_\_\_\_\_

Place of worship with spire: \_\_\_\_\_

Public telephone: \_\_\_\_\_

Windmill: \_\_\_\_\_

Bridge (there are 2 of these): \_\_\_\_\_

Geo farm: \_\_\_\_\_